






NAME:

TASK	TASK DESCRIPTION	COMMENTS	TIME SPENT
1. <input type="checkbox"/> ✓/X	 KEY SKILLS PRACTICE ➤ Get 2 out of 3 correct for each of the following skills: ➤ K651, K579, K560, K734, K569 ➤ Use the worked solutions after entering an answer to help with any you get stuck with.		
2. <input type="checkbox"/> ✓/X	 EXAM QUESTIONS ➤ Complete questions from 'Week 24 Exam Questions' sheet. ➤ Use the solutions to mark and correct your answers. ➤ Record your score and 'target' topic on this front sheet.	Score: Target topic:	
3. <input type="checkbox"/> ✓/X	 PRACTICE QUESTIONS - PURE ➤ Complete questions on the 'AQA Differentiation Topic Assessment worksheet'. ➤ Use the solutions to mark and correct your answers.		
4. <input type="checkbox"/> ✓/X	 PRACTICE QUESTIONS - STATISTICS ➤ Complete Question 7(c)(d)(e) from 'Mixed Practice 22' in the textbook. ➤ USE THE SOLUTIONS TO MARK AND CORRECT YOUR ANSWERS.		
5. <input type="checkbox"/> ✓/X	 FURTHER PRACTICE QUESTIONS ➤ Complete the following questions from MP1 IYGB paper C : ○ Q1-6, 9-12 ➤ Use the solutions to mark and correct your answers.		
	ENRICHMENT Ben Sparks would have been the host at the Maths Fest trip that college were running. Here is one of his Numberphile videos, 'What's so special about the Mandelbrot Set?' Link		
TOTAL TIME SPENT:			

Maths Puzzle of the Week

Below are four congruent squares. Which has the largest shaded area?

